




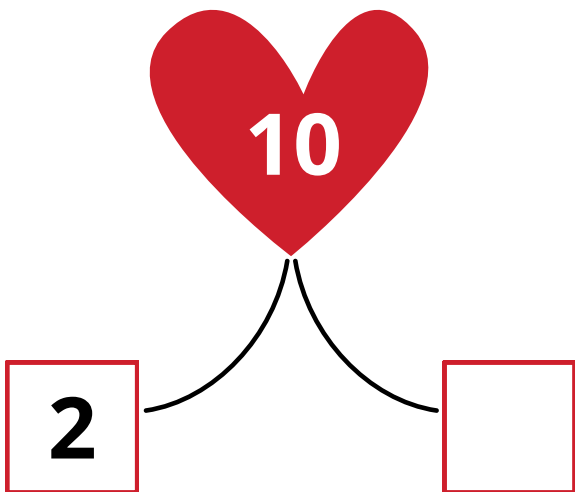


de verliefde harten

welk getal hoort in het lege hartje?






de verliefde harten

splitsen!



de verliefde harten

vul de hartjes in en maak de sommen



$1 + \underline{\quad} = 10$

$2 + \underline{\quad} = 10$

$3 + \underline{\quad} = 10$

$4 + \underline{\quad} = 10$

$5 + \underline{\quad} = 10$

$8 + \underline{\quad} = 10$

$6 + \underline{\quad} = 10$

$5 + \underline{\quad} = 10$

$7 + \underline{\quad} = 10$

$9 + \underline{\quad} = 10$

$3 + \underline{\quad} = 10$

$4 + \underline{\quad} = 10$

$8 + \underline{\quad} = 10$

$1 + \underline{\quad} = 10$

$6 + \underline{\quad} = 10$

$9 + \underline{\quad} = 10$

$7 + \underline{\quad} = 10$

$2 + \underline{\quad} = 10$

$3 + \underline{\quad} = 10$

$1 + \underline{\quad} = 10$

$10 - 9 = \underline{\quad}$

$10 - 5 = \underline{\quad}$

$10 - 3 = \underline{\quad}$

$10 - 6 = \underline{\quad}$

$10 - 4 = \underline{\quad}$

$10 - 8 = \underline{\quad}$

$10 - 1 = \underline{\quad}$

$10 - 5 = \underline{\quad}$

$10 - 7 = \underline{\quad}$

$10 - 2 = \underline{\quad}$


thank you
bedankt voor het downloaden!

Veel plezier met het document!

Ik zou het leuk vinden als je mijn materialen
bij anderen aanraadt



Volg mij via Instagram en Facebook, leuk als je mij tagt wanneer je de materialen gebruikt!

 @elise_inonderwijsland

 /eliseinonderwijsland